

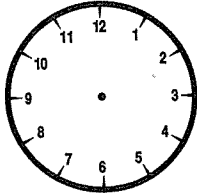
There are 60 minutes in one hour. There are 30 minutes in $\frac{1}{2}$ (half) an hour.

Remember the little hand moves too.

It must be half-way between one hour and the next.

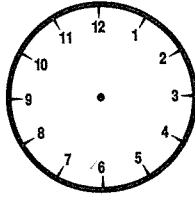
Draw the time on these analog clocks.
Record the time under each clock in digital time.

a



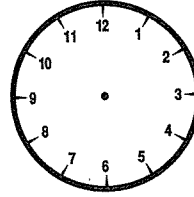
$\frac{1}{2}$ past 7

b



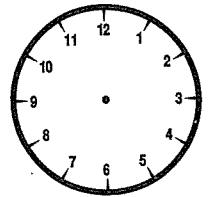
$\frac{1}{2}$ past 2

c



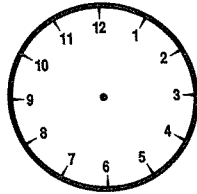
$\frac{1}{2}$ past 10

d

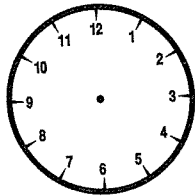


$\frac{1}{2}$ past 6

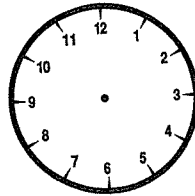
Draw the time on these analog clocks. Use a colour for the hour hand (little hand).



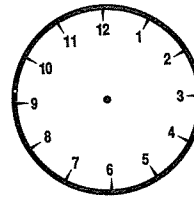
$\frac{1}{4}$ to 9



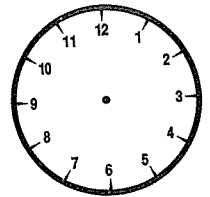
$\frac{1}{4}$ past 6



5:15



7:45



$\frac{1}{4}$ to 12